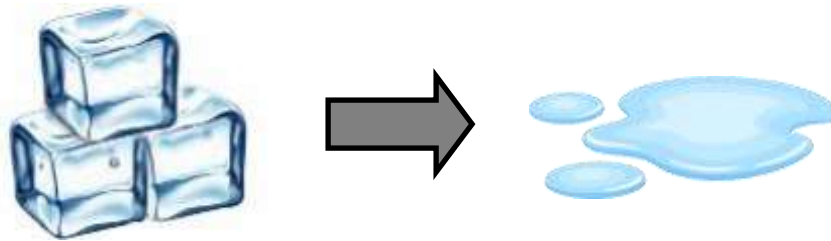


Changing states of water

Grade 2 Science Worksheet

Fill in each blank with heated or cooled.

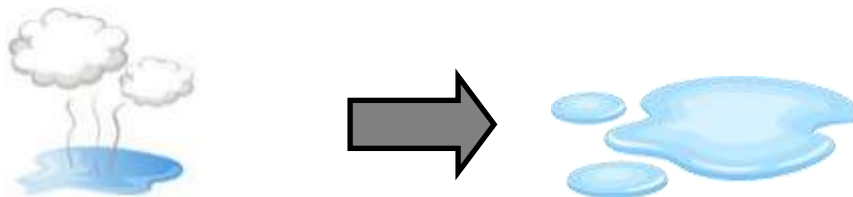
Ice changes to water when it is _____.



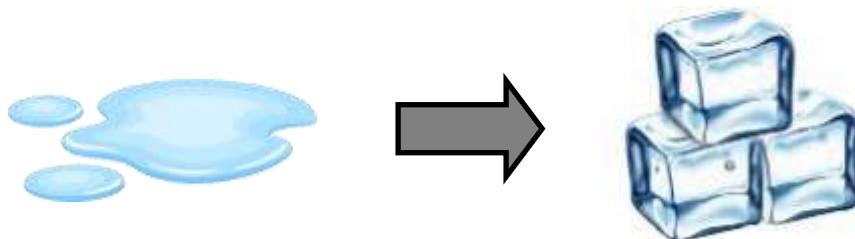
Water changes to water vapor when it is _____.



Water vapor changes to water when it is _____.



Water changes to ice when it is _____.



Changing states of matter

Grade 2 Science Worksheet

Fill in the blanks.

water vapor

solid

ice

gas

liquid

heated



Water turns to _____ when it freezes.
It turns from a _____ to a solid.



When water is heated enough, it becomes
_____.
It turns from a liquid to a _____.

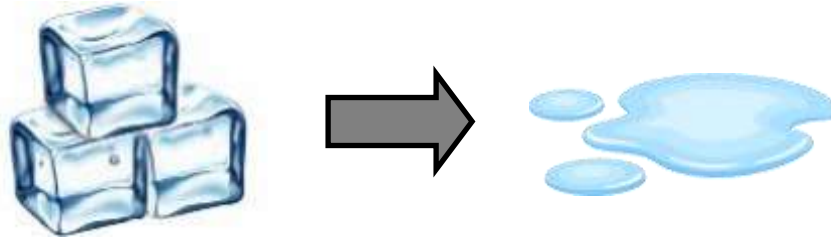


When ice is _____ it turns to water.
It changes from a _____ to a liquid.

Answers

Fill in each blank with heated or cooled.

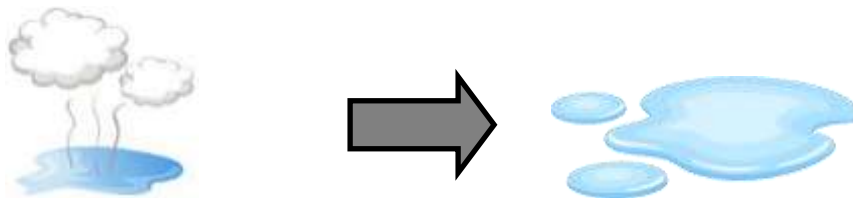
Ice changes to water when it is heated.



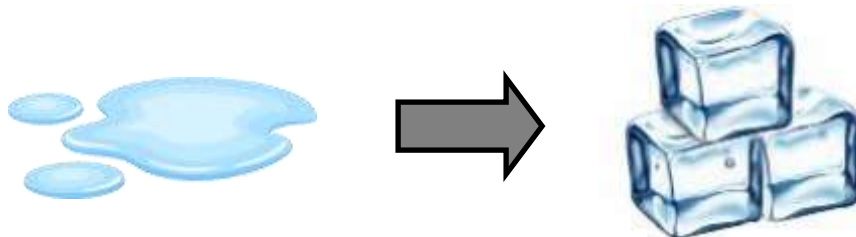
Water changes to water vapor when it is heated.



Water vapor changes to water when it is cooled.



Water changes to ice when it is cooled.



Answers

water vapor

solid

ice

gas

liquid

heated



Water turns to ice when it freezes.
It turns from a liquid to a solid.



When water is heated enough, it becomes water vapor.
It turns from a liquid to a gas.



When ice is heated it turns to water.
It changes from a solid to a liquid.