

Name:

Section:

Date:

Teacher:

# TELLING TIME

Read the clock and write the time shown.

Examples:



7 : 00



Half Past 8



\_\_\_\_\_



\_\_\_\_\_



\_\_\_\_\_



\_\_\_\_\_




\_\_\_\_\_



\_\_\_\_\_



\_\_\_\_\_



\_\_\_\_\_



\_\_\_\_\_

Name: \_\_\_\_\_

Section: \_\_\_\_\_

Date: \_\_\_\_\_

Teacher: \_\_\_\_\_

# TELLING TIME

Read the clock and write the time shown.



\_\_\_\_\_



\_\_\_\_\_



\_\_\_\_\_



\_\_\_\_\_



\_\_\_\_\_



\_\_\_\_\_



\_\_\_\_\_



\_\_\_\_\_




\_\_\_\_\_



\_\_\_\_\_



\_\_\_\_\_



\_\_\_\_\_

Name: \_\_\_\_\_

Section: \_\_\_\_\_

Date: \_\_\_\_\_

Teacher: \_\_\_\_\_

# TELLING TIME

Read the clock and write the time shown.



\_\_\_\_\_



\_\_\_\_\_



\_\_\_\_\_



\_\_\_\_\_



\_\_\_\_\_



\_\_\_\_\_



\_\_\_\_\_




\_\_\_\_\_



\_\_\_\_\_



\_\_\_\_\_



\_\_\_\_\_



\_\_\_\_\_