

Name:

Section:

Date:

Teacher:

Sam Sells Seashells

Count how many seashells are sold by the seashore.

$$12 + 19 =$$

$$29 + 62 =$$


$$73 + 45 =$$

$$38 + 54 =$$

$$27 + 16 =$$

$$54 + 36 =$$

SCORE:



Name:

Section:

Date:

Teacher:

Sam Sells Seashells

Count how many seashells are sold by the seashore.

$$14 + 29 =$$

$$41 + 79 =$$

$$24 + 55 =$$

$$77 + 47 =$$

$$31 + 64 =$$

$$14 + 97 =$$

SCORE:

Name:


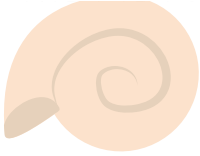

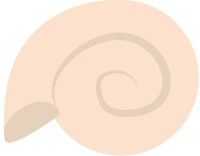
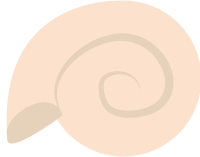

Section:

Date:

Teacher:

Sam Sells Seashells

Count how many seashells
are sold by the seashore.

22	+	66	=	
23	+	47	=	
71	+	51	=	
49	+	41	=	
17	+	77	=	
91	+	17	=	

SCORE:

Name:

Section:


Date:

Teacher:

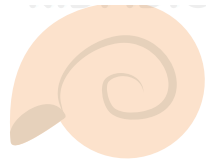
Sam Sells Seashells

Count how many seashells are sold by the seashore.


$$61 + 36 =$$




$$45 + 72 =$$



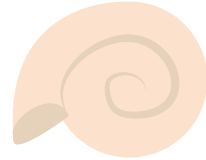
$$33 + 71 =$$



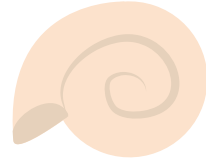
$$29 + 66 =$$




$$72 + 33 =$$



$$62 + 21 =$$



SCORE:



Name:



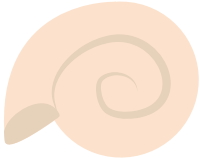
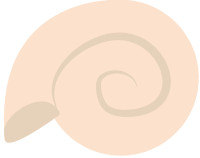


Section:

Date:

Teacher:

Sam Sells Seashells

Count how many seashells
are sold by the seashore.

24	+	59	=	
87	+	21	=	
26	+	66	=	
88	+	35	=	
44	+	73	=	
50	+	61	=	

SCORE:

Name:


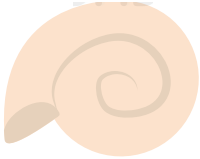




Section:

Date:

Teacher:

Sam Sells Seashells

Count how many seashells are sold by the seashore.

42	+	49	=	
32	+	81	=	
41	+	73	=	
62	+	87	=	
12	+	60	=	
30	+	30	=	

SCORE:

Name:

Section:

Date:

Teacher:

Sam Sells Seashells

Count how many seashells are sold by the seashore.

$$56 + 65 =$$

$$35 + 72 =$$


$$70 + 30 =$$

$$41 + 51 =$$

$$63 + 48 =$$

$$71 + 56 =$$

SCORE:



Name:



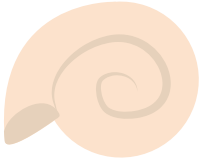
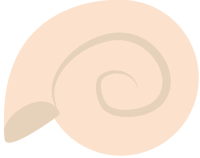


Section:

Date:

Teacher:

Sam Sells Seashells

Count how many seashells
are sold by the seashore.

31	+	24	=	
61	+	30	=	
90	+	38	=	
89	+	68	=	
41	+	60	=	
54	+	45	=	

SCORE:

Name:

Section:

Date:

Teacher:

Sam Sells Seashells

Count how many seashells
are sold by the seashore.

$$44 + 39 = \text{Seashell}$$

$$99 + 23 = \text{Seashell}$$

$$33 + 96 = \text{Seashell}$$

$$28 + 48 = \text{Seashell}$$

$$85 + 58 = \text{Seashell}$$

$$73 + 61 = \text{Seashell}$$

SCORE:

Name:


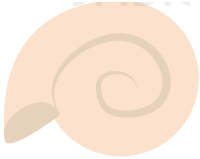




Section:

Date:

Teacher:

Sam Sells Seashells

Count how many seashells are sold by the seashore.

43	+	99	=	
60	+	30	=	
51	+	15	=	
65	+	56	=	
72	+	32	=	
51	+	48	=	

SCORE: