

Science & Social Studies


Name: \_\_\_\_\_

Date: \_\_\_\_\_

Class: 2

Section: \_\_\_\_\_

Look at the food items and colour the healthy food.



Student's Performance

Exceeding Development	Expected Development	Emerging Development

Teacher's Comments:

\_\_\_\_\_

\_\_\_\_\_

Teacher's Signature

Re-checker's Signature

School Stamp

\_\_\_\_\_

\_\_\_\_\_

\_\_\_\_\_

## Section A

Q1. Choose the correct answer to fill in the blanks.

muscles, spine, flowers, lungs, hair, claws, milk teeth

a) Eagles have sharp \_\_\_\_\_ to catch live fish from the sea.

b) Our first set of teeth are called \_\_\_\_\_.

c) Harmful smoke affects the human \_\_\_\_\_.

d) The \_\_\_\_\_ is our backbone.

e) Fur is another name for \_\_\_\_\_.

f) Protein in our food helps build our \_\_\_\_\_.

g) Insects are attracted to the \_\_\_\_\_ because of the colours.



Q2. State if the following statements are true or false.

a) We use a microscope to see micro-organisms. \_\_\_\_\_

b) The dicot seeds have 3 cotyledons. \_\_\_\_\_

c) The polar bear lives in a macro habitat. \_\_\_\_\_

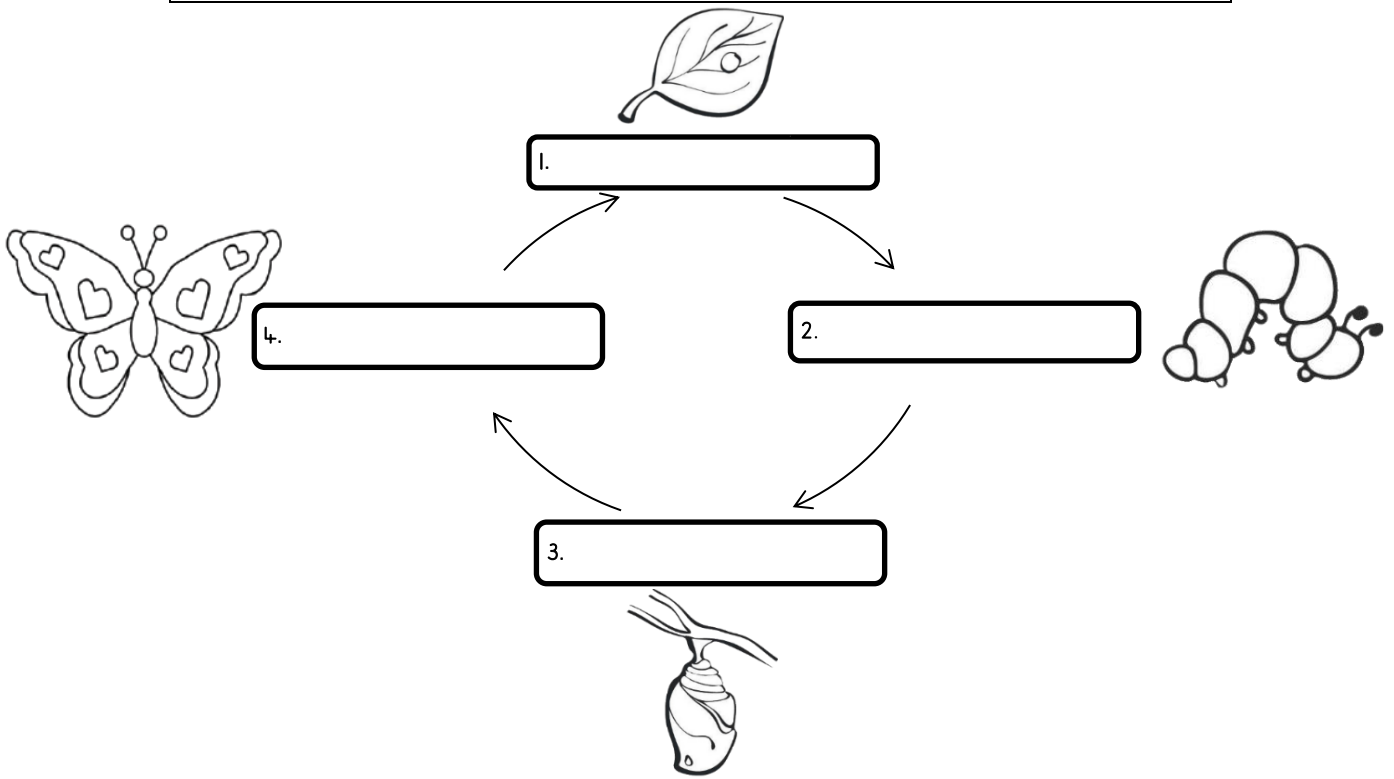
d) The spine protects our lungs. \_\_\_\_\_

e) The holes in our skin are called pores. \_\_\_\_\_



Q3. Label the life cycle of a butterfly.

butterfly- pupa - eggs - chrysalis- caterpillar



Q4. Answer the following questions:

a) What is the function of canine teeth?

---

---

b) What are living things ?

---

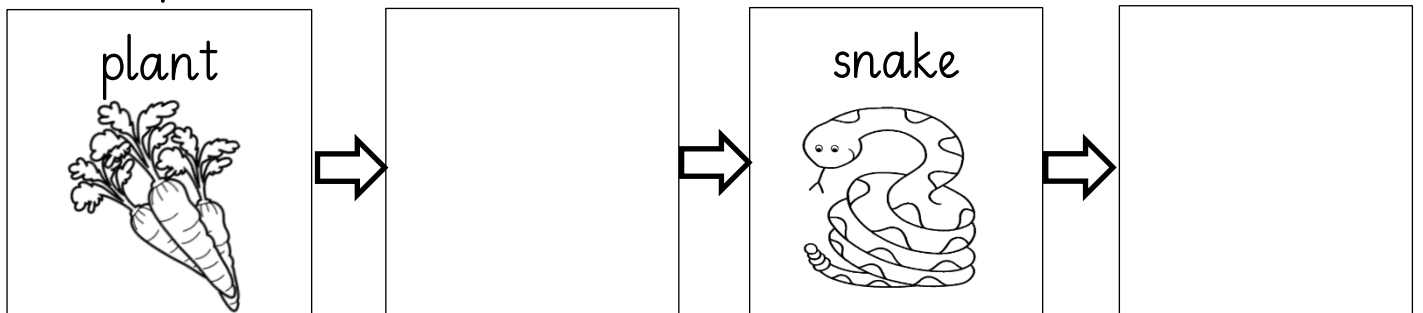
---

c) What is Omnivores ?

---

---


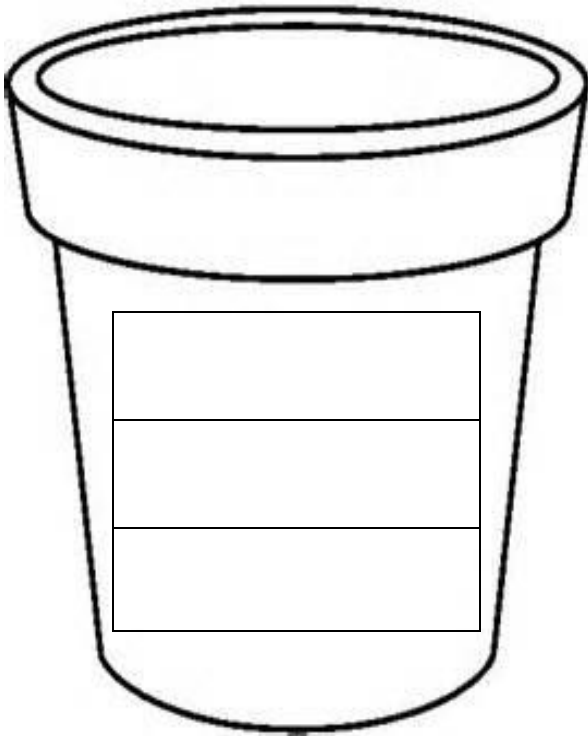
Q5. Complete the food chain.



Q6. Draw a plant and label it.

Draw

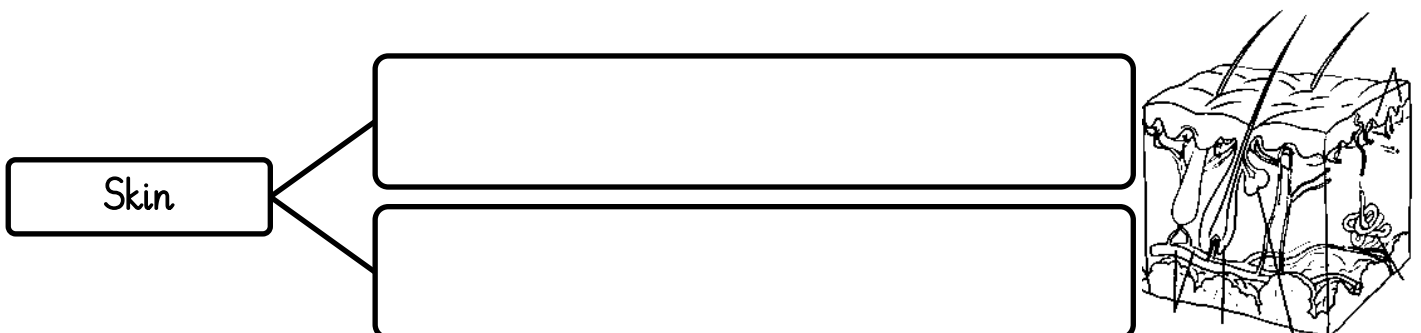
a. What does a plant need to grow?




b. Match the function with its part of a plant.

stem	make new seeds.
leaves	absorb water and nutrients from the soil.
flower	carries water from the roots to the leaves.
roots	absorb sunlight

Q7 (a). Write any two functions of our skin.




(b) Sort the animals as per their body coverings. Write the names in appropriate column.



fur	feather	scales

Q8. Label the food groups in the given pyramid.



## Section B

Q1. Fill in the blanks with the correct answer.

1. We use a \_\_\_\_\_ for finding directions. (compass, globe)
2. Pakistan came into being on \_\_\_\_\_.  
(14<sup>th</sup> August, 25<sup>th</sup> December)
3. Rabi crops are harvested in \_\_\_\_\_ season. (spring, autumn)
4. The first Pakistani to travel to space was \_\_\_\_\_.  
(Quaid-e-Azam, Namira Salim)
5. We should not play with \_\_\_\_\_ appliances. ( water, electrical)

Q2. Match the statement from Column A and B and write the correct combination in Column C

A	B	C
1.Do not run,	a.in China	
2.Exercise makes our body	b.it makes the fire burn faster.	
3.Dragon festival is celebrated	c.healthy and strong.	

Q3 . Who am I ?

Doctor

Chef

Astronaut

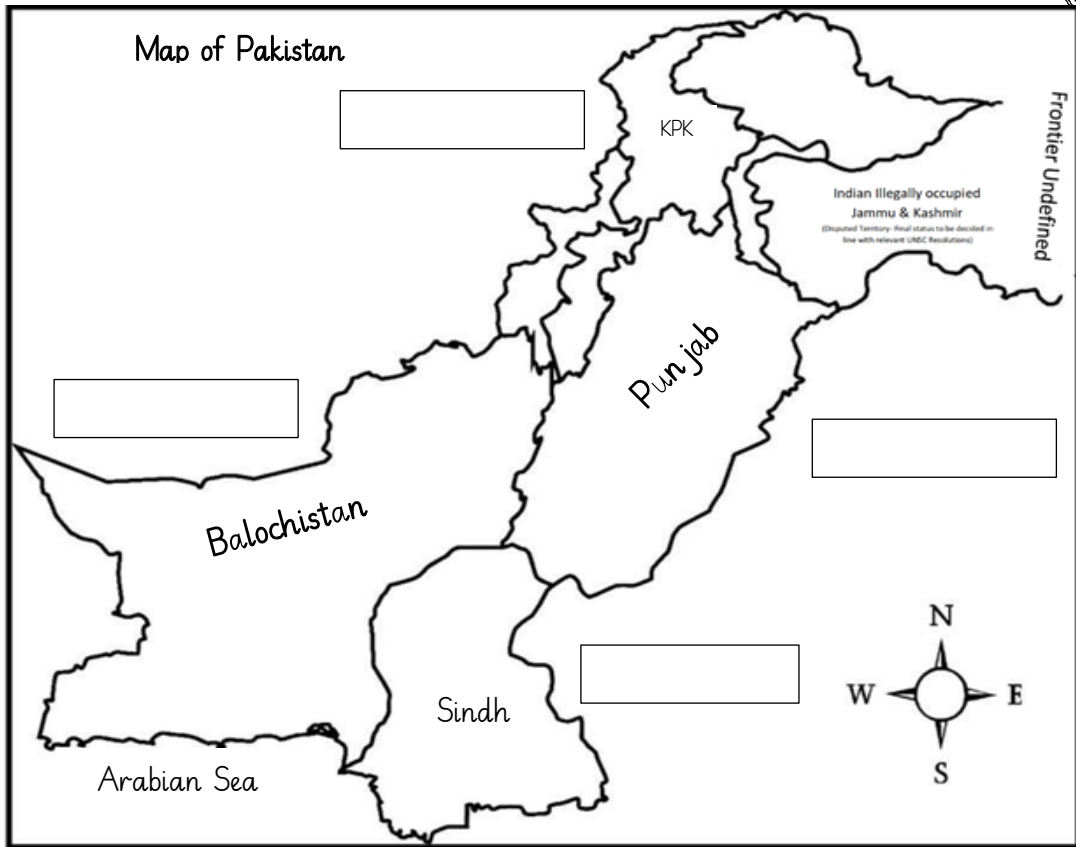
Scientist

Farmer

1. I work hard in the field all day. \_\_\_\_\_
2. I work in a space shuttle ,I love stars in the sky \_\_\_\_\_
3. I love creating new and tasty meals. \_\_\_\_\_
4. I help people feel better when they are sick. \_\_\_\_\_
5. I do experiments and invent new things. \_\_\_\_\_

Q. 4. Label the capital cities of provinces in Pakistan.

Karachi. Lahore, Quetta, Peshawar



Q6. Write down the languages and the religions of the given neighbouring countries.

Islam, Mandarin, Hinduism, Persian, Pashto, Christianity, Hindi

Neighbouring countries	Languages	Religion
Iran		
Afghanistan		
China		
India		