

Name: \_\_\_\_\_

Section: \_\_\_\_\_

Date: \_\_\_\_\_

Teacher: \_\_\_\_\_

# MENU MATH

Using the prices indicated, calculate the amount needed to purchase the choices shown in each column.




\$1.00



\$1.25



\$1.50

















\$1.75



\$2.00



\$2.25

|                                                                                                                                                                                                                                                                                                                                                                                                                                                 |                                                                                                                                                                                                                                                                                                                                                                                                                                                 |                                                                                                                                                                                                                                                                                                                                                                  |
|-------------------------------------------------------------------------------------------------------------------------------------------------------------------------------------------------------------------------------------------------------------------------------------------------------------------------------------------------------------------------------------------------------------------------------------------------|-------------------------------------------------------------------------------------------------------------------------------------------------------------------------------------------------------------------------------------------------------------------------------------------------------------------------------------------------------------------------------------------------------------------------------------------------|------------------------------------------------------------------------------------------------------------------------------------------------------------------------------------------------------------------------------------------------------------------------------------------------------------------------------------------------------------------|
| <br><br><br><br> | <br><br><br><br> | <br><br><br> |
| <p>Total:</p> <div style="border: 1px solid black; height: 40px; width: 100%;"></div>                                                                                                                                                                                                                                                                                                                                                           | <p>Total:</p> <div style="border: 1px solid black; height: 40px; width: 100%;"></div>                                                                                                                                                                                                                                                                                                                                                           | <p>Total:</p> <div style="border: 1px solid black; height: 40px; width: 100%;"></div>                                                                                                                                                                                                                                                                            |

Name: \_\_\_\_\_

Section: \_\_\_\_\_

Date: \_\_\_\_\_


Teacher: \_\_\_\_\_

# MENU MATH

Using the prices indicated, calculate the amount needed to purchase the choices shown in each column.



\$0.75



\$1.04



\$2.00



\$1.15



\$2.30



\$5.25

Total: \_\_\_\_\_

Total: \_\_\_\_\_

Total: \_\_\_\_\_

Name:

Section:

Date:


Teacher:

# MENU MATH

Using the prices indicated, calculate the amount needed to purchase the choices shown in each column.




\$1.20




\$1.15



\$1.00






\$3.75






\$2.20






\$2.85



Total:



Total:



Total:

Name:


Section:

Date:

Teacher:

# MENU MATH

Using the prices indicated, calculate the amount needed to purchase the choices shown in each column.



|                                       |                                       |                                   |
|---------------------------------------|---------------------------------------|-----------------------------------|
| <br><br><br><br><br><br><b>Total:</b> | <br><br><br><br><br><br><b>Total:</b> | <br><br><br><br><br><b>Total:</b> |
|---------------------------------------|---------------------------------------|-----------------------------------|

Name: \_\_\_\_\_

Section: \_\_\_\_\_

Date: \_\_\_\_\_

Teacher: \_\_\_\_\_

# MENU MATH

Using the prices indicated, calculate the amount needed to purchase the choices shown in each column.



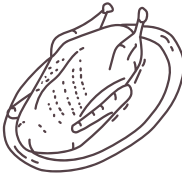
\$1.17



\$1.85



\$1.74



\$3.79



\$2.71



\$1.06

Total:

Total:

Total: