

Name:

Section:


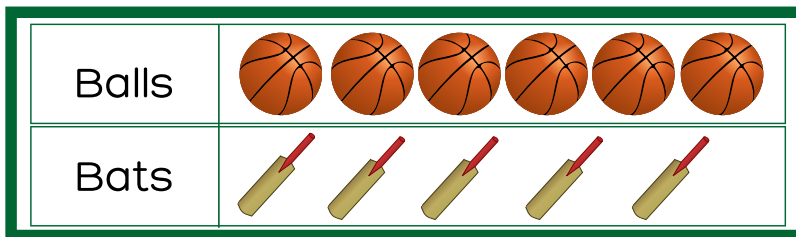
Date:

Teacher:




DATA INTERPRETATION




Interpret data in tally charts, pictures graphs tables.

Ben is a owner of sports shop. He sell 6 balls and 5 Bats. He made a picture graph of the items. Which is that graph?



Mega went to the zoo. She saw 7 tigers, 4 lions, 11 monkeys. Mega made a tally chart of the data. Which is her tally chart?

1. Tiger	
2. Lion	
3. Monkey	

1. Tiger	
2. Lion	
3. Monkey	

Name:

Section:

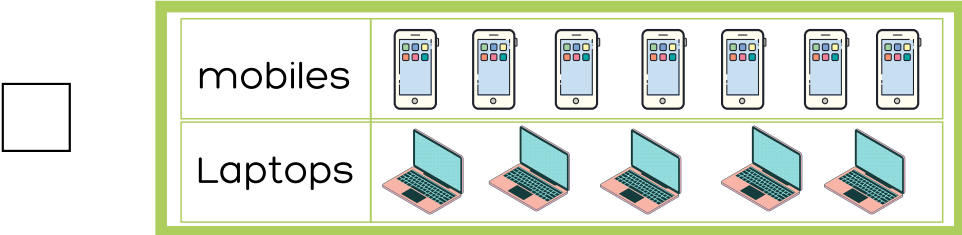
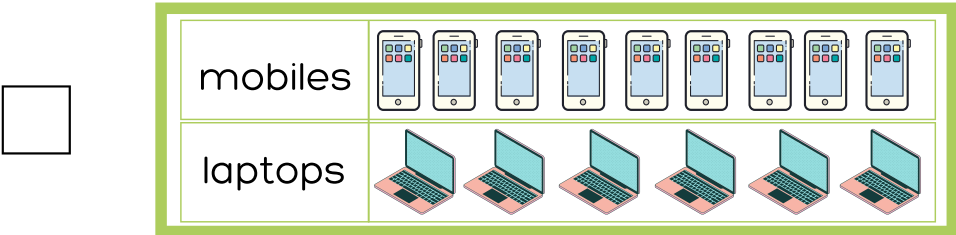
Date:

Teacher:

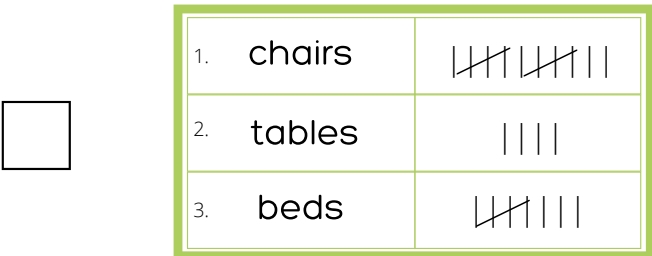
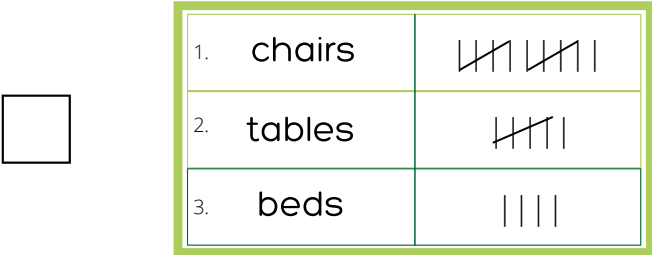
DATA INTERPRETATION

Interpret data in tally charts, pictures graphs tables.

Renu is a gadget lover. She collects 6 laptops, 9 mobiles. She made a picture graph of the gadgets. Which is that graph?



Mahat went to the furniture shop and bought some furniture for his new home. He bought 11 chairs, 6 tables, 4 beds. Mahat made a tally chart of the data. Which is his tally chart?



Name:

Section:

Date:



Teacher:

DATA INTERPRETATION

Interpret data in tally charts, pictures graphs tables.



Ria saw some birds are flying in the sky. She saw 6 peacocks, 8 crows. She made a picture graph of the items. Which is that graph?



Kadhir and family went to the hotel. They ordered 8 pizzas, 11 eggs, 14 burgers. Kadhir made a tally chart of the data. Which is her tally chart?



Name:

Section:

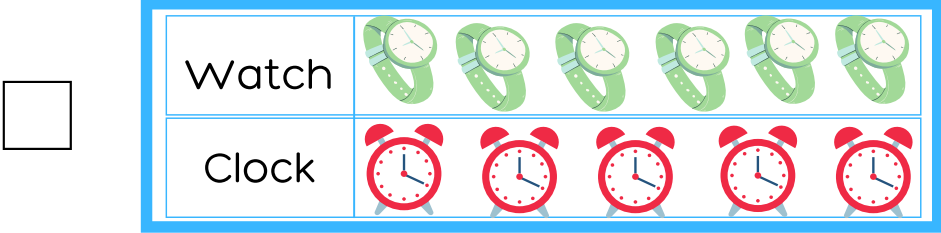

Date:

Teacher:

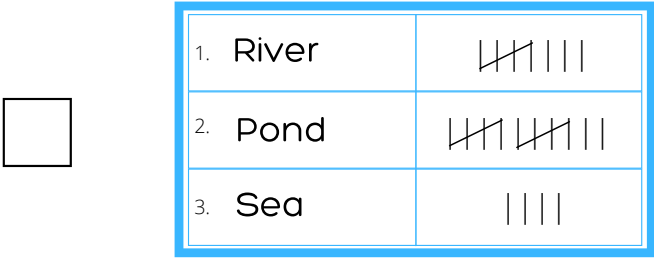
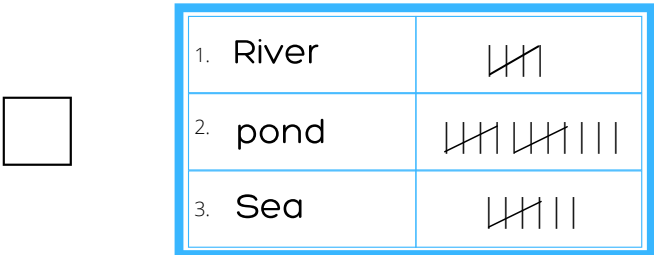
DATA INTERPRETATION

Interpret data in tally charts, pictures graphs tables.

Banu works in a titan showroom. He sell 5 watches and 6 clocks. She made a picture graph of the items. Which is that graph?



Shreya went for a world tour. She saw many source of water like river, pond, sea. She saw 5 rivers, 13 ponds, 7 seas. Shreya made a tally chart of the data. Which is her tally chart?



Name:

Section:

Date:

Teacher:

DATA INTERPRETATION

Interpret data in tally charts, pictures graphs tables.

Akira is a owner of Ice cream shop. She sell 4 cone Ice creams and 6 cup Ice creams. He made a picture graph of the Ice creams. Which is that graph?



George was interested in buying a pet. So he went to a pet shop to buy a new pet for his home. In the shop, he saw 7 dogs, 5 cats, 10 rabbits. George made a tally chart of the data. Which is her tally chart?

1. Dog	
2. Cat	
3. Rabbit	

1. Dog	
2. Cat	
3. Rabbit	

Name:

Section:

Date:

Teacher:




DATA INTERPRETATION




Interpret data in tally charts, pictures graphs tables.

Rahul went for a birthday party. There he saw some party items and got excited. He saw 20 balloons, 1 cake, 25 birthday caps and 15 gifts. Draw a table which shows items seen by rahul.

Item				
How many?				

Priya have some nuts for her snacks. She have 4 walnuts, 6 peanuts, 7 almonds. She made a tally chart of the nuts she have. She made a tally chart of the nuts she have. Which tally chart is correct drawn by priya.

1. 	
2. 	
3. 	

1. 	
2. 	
3. 	

Name:

Section:

Date:

Teacher:

DATA INTERPRETATION


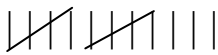



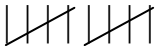
Interpret data in tally charts, pictures graphs tables.




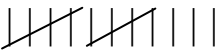


Lena and her Family went to the shop and bought some clothes for her family. They bought 14 shirts, 6 skirts, 5 frocks, 11 pants.

Draw a table which shows the clothes bought by Lena's family.

Item				
How many?				

Rama went to the fancy store. There she saw 11 necklaces, 13 bangles, 14 rings. She made a tally chart of the jewels she saw. Which tally chart is correct drawn by Rama.

1. 	
2. 	
3. 	

1. 	
2. 	
3. 	

Name:

Section:





Date:

Teacher:


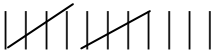

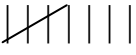


DATA INTERPRETATION


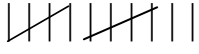

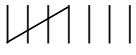


Interpret data in tally charts, pictures graphs tables.

Laura got a text message from his friend. There were many emojis in the message that showed some expressions of Laura's friend. They were 5 smile emojis, 6 love emojis, 7 sad emojis and 3 cry emojis.

Item				
How many?				

Alandra bought a makeup items in the shop. She bought 12 lipsticks, 8 nail polishes, 4 face cream. She made a tally chart of the items she bought. Which tally chart is correct drawn by alandra.

1. 	
2. 	
3. 	

1. 	
2. 	
3. 	

Name:

Section:





Date:

Teacher:







DATA INTERPRETATION







Interpret data in tally charts, pictures graphs tables.

Monigaa drew a drawing. She used multiple colours in her drawing. She used red 3 times, blue 5 times, green 7 times and orange 2 times. Draw a table which shows the colour used by monigaa.

colour				
How many?				

There are some cutlers in Roofa's home. She have 11 spoons, 6 forks, 5 knives. Draw a table which shows the cutlers having by roofa.

1. 	
2. 	
3. 	

1. 	
2. 	
3. 	

Name:

Section:





Date:

Teacher:







DATA INTERPRETATION





Interpret data in tally charts, pictures graphs tables.

Emma went to the stationary shop and bought some things for her school project work. She bought 1 scissor, 14 books, 4 glues, 5 crayons. Draw a table which shows the items bought by Emma.

Item				
How many?				

Olivia collected some flowers to make garland. She collected 12 rose flowers, 8 anemone flowers and 14 lotus flowers. She made a tally chart of the flowers she collected. Which tally chart is correct drawn by Olivia.

1. 	
2. 	
3. 	

1. 	
2. 	
3. 