

Name: _____



Section: _____


Date: _____

Teacher: _____

Juice Store Bar Graph

A fruit juice store recorded the number of glasses sold.
Create a bar graph and answer the questions.

Fruit Juice	Lemon	Grape	Apple	Orange
Number of Glasses sold	 7	 10	 9	 8



1. What juice sold the most? _____
2. What juice sold the least? _____
3. How many glasses of apple juice were sold? _____
4. How many more glasses of grapes juice were sold than lemon juice? _____
5. How many glasses of orange and apple juice together were sold? _____
6. How many glasses were sold in all? _____

Name: _____

Section: _____

Date: _____

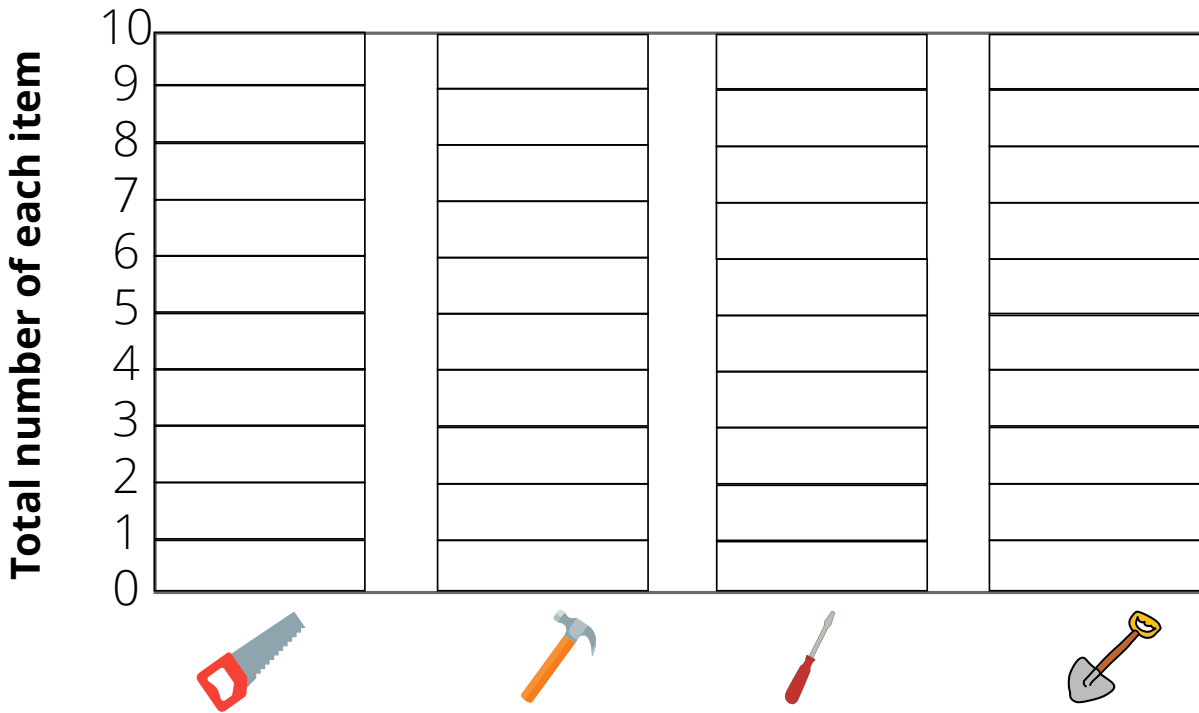
Teacher: _____

Tool Bar Graph

Vince recorded the total number of each tool.
Create a bar graph and answer the questions.

Tool	Saw	Hammer	Screwdriver	Shovel
Total Number	 5	 9	 8	 8

Construction Tool



1. How many screwdrivers are there? _____
2. Which tool is the greatest in number? _____
3. Which tool is the least in number? _____
4. Which tools have the same number? _____
5. How many shovels and hammers are there? _____
6. If vince added six more hammers, how many hammers would there _____

Name: _____

Section: _____

Date: _____

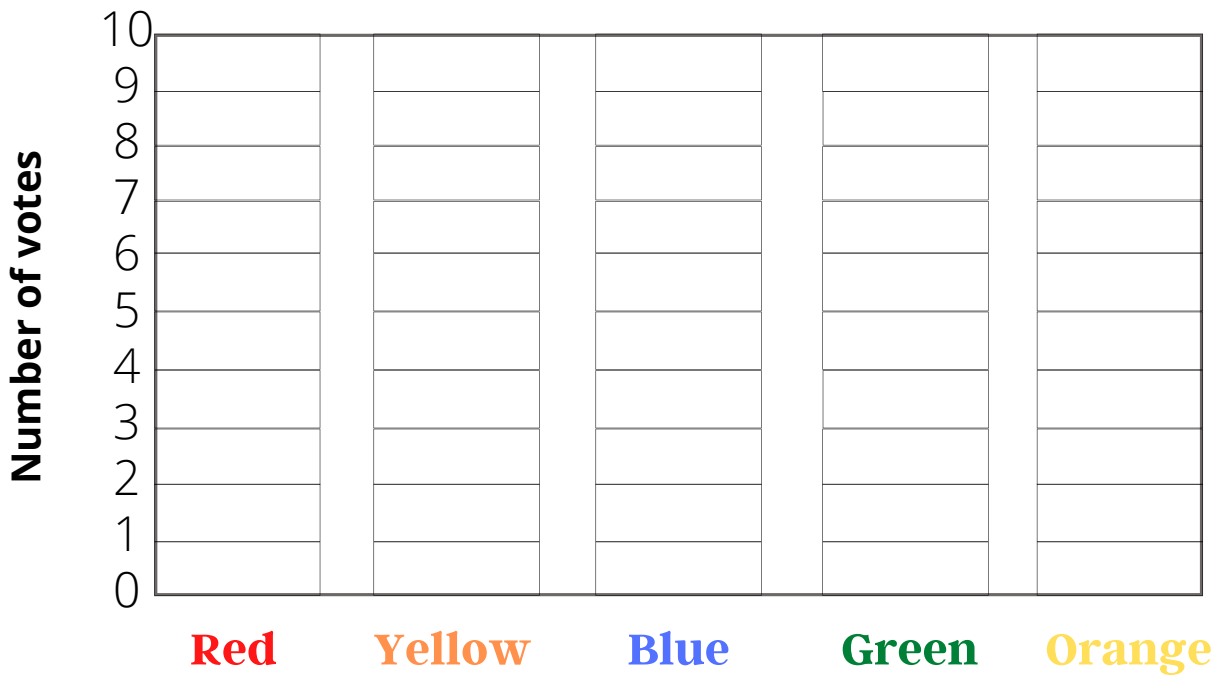
Teacher: _____

Favorite Color Bar Graph

Kyla asked her friends to vote on their favorite colors.
Create a bar graph and answer the questions.

Colors	Red	Yellow	Blue	Green	Orange
Votes	6	10	5	6	8

Favorite Color



1. What color is liked the most? _____
2. Which color is liked the least? _____
3. What two colors got a total of 12 votes? _____
4. How many more votes did red have than blue? _____
5. How many fewer votes did blue have than yellow? _____
6. How many kids voted for red, green and orange? _____
7. How many votes were there in total? _____