

Name:

Section:

Date:

Teacher:

# TIME

So many silly clocks! Write the time you see on each clocks.



\_\_\_\_\_

\_\_\_\_\_

\_\_\_\_\_



\_\_\_\_\_

\_\_\_\_\_


\_\_\_\_\_



\_\_\_\_\_

\_\_\_\_\_

\_\_\_\_\_



\_\_\_\_\_

\_\_\_\_\_

\_\_\_\_\_



\_\_\_\_\_

\_\_\_\_\_

\_\_\_\_\_



\_\_\_\_\_

\_\_\_\_\_

\_\_\_\_\_



\_\_\_\_\_

\_\_\_\_\_

\_\_\_\_\_



\_\_\_\_\_

\_\_\_\_\_

\_\_\_\_\_



\_\_\_\_\_

\_\_\_\_\_

\_\_\_\_\_

Name:

Section:

Date:

Teacher:

# THE HOURS

Circle the correct time for each clock. Tick (✓) the correct answer.



9:00

4:00



11:00

5:00



4:00

3:00



12:00

3:00



9:00

2:00



5:00

1:00




8:00

7:00



6:00

8:00



9:00

6:00

Name:

Section:

Date:

Teacher:

# THE HOURS

Circle the correct time for each clock. Tick (✓) the correct answer.



9:00

4:00



11:00

5:00



4:00

3:00



12:00

3:00



9:00

4:00



5:00

1:00



8:00

7:00



6:00

8:00



9:00

6:00

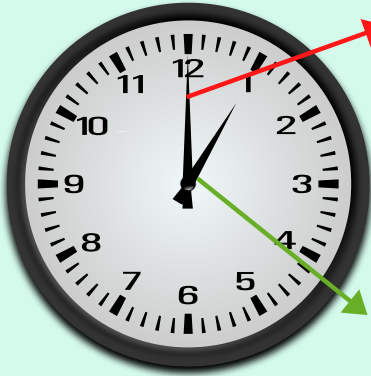
Name:

Section:

Date:

Teacher:

# TICK TOCK



Big Hand. It points to the minutes.

1:00

Big Hand. It points to the minutes.

The little hand is pointing to the 9.

The big hand is pointing to the 12.

That means it's 9:00.



7:00



8:00



6:00



12:00



9:00



5:00

Name:

Section:

Date:

Teacher:

# MATCH THE CLOCKS

Draw a line to match the clocks that show the same time.



6:00

7:00

8:00

12:00

9:00

3:00

5:00

11:00

