

Name: \_\_\_\_\_

Class: \_\_\_\_\_

Date: \_\_\_\_\_

Teacher: \_\_\_\_\_

# Apple Subtraction


Solve the subtraction by crossing out the numbers to be subtracted. Write the answers on the line.



$5 - 2 = \underline{\hspace{2cm}}$



$3 - 2 = \underline{\hspace{2cm}}$



$4 - 1 = \underline{\hspace{2cm}}$



$3 - 1 = \underline{\hspace{2cm}}$



$5 - 1 = \underline{\hspace{2cm}}$



$3 - 3 = \underline{\hspace{2cm}}$

Name: \_\_\_\_\_

Class: \_\_\_\_\_

Date: \_\_\_\_\_


Teacher: \_\_\_\_\_

# Apple Subtraction

Solve the subtraction by crossing out the numbers to be subtracted. Write the answers on the line.




$$5 - 4 = \underline{\hspace{2cm}}$$




$$2 - 2 = \underline{\hspace{2cm}}$$



$$5 - 3 = \underline{\hspace{2cm}}$$



$$2 - 1 = \underline{\hspace{2cm}}$$



$$4 - 4 = \underline{\hspace{2cm}}$$



$$1 - 1 = \underline{\hspace{2cm}}$$