

# BASIC MATH FOR KIDS




Name: \_\_\_\_\_

Date: \_\_\_\_\_

# Number Sense

Connect each dice to its matching numeral and finger.



4



2



1



3



5




Name: \_\_\_\_\_


Date: \_\_\_\_\_

# Number Sense



Connect each dice to its matching numeral and  
popsicle sticks.




8




6



7



9



Name: \_\_\_\_\_

Date: \_\_\_\_\_

# Count and Color

Color the fruit based on the given numbers

5



3



7



6




9



8



4



Name: \_\_\_\_\_

Date: \_\_\_\_\_

# Addition

solve and write the sum.

$1 + 2 = \underline{\hspace{2cm}}$

$1 + 3 = \underline{\hspace{2cm}}$

$1 + 4 = \underline{\hspace{2cm}}$

$2 + 1 = \underline{\hspace{2cm}}$

$2 + 2 = \underline{\hspace{2cm}}$

$3 + 2 = \underline{\hspace{2cm}}$



Name: \_\_\_\_\_


Date: \_\_\_\_\_

# Adding Using Picture


Count the objects, write the number of each and find the sum.



$$\underline{\quad} + \underline{\quad} = \underline{\quad}$$




$$\underline{\quad} + \underline{\quad} = \underline{\quad}$$



$$\underline{\quad} + \underline{\quad} = \underline{\quad}$$



$$\underline{\quad} + \underline{\quad} = \underline{\quad}$$



$$\underline{\quad} + \underline{\quad} = \underline{\quad}$$



Name: \_\_\_\_\_

Date: \_\_\_\_\_

# Addition

solve and write the sum.

$2+4=$  \_\_\_\_\_

$1+3=$  \_\_\_\_\_

$5+6=$  \_\_\_\_\_

$1+7=$  \_\_\_\_\_

$2+6=$  \_\_\_\_\_

$8+3=$  \_\_\_\_\_

$9+3=$  \_\_\_\_\_

$2+8=$  \_\_\_\_\_

$7+3=$  \_\_\_\_\_

$2+1=$  \_\_\_\_\_

$6+6=$  \_\_\_\_\_

$9+7=$  \_\_\_\_\_

$7+7=$  \_\_\_\_\_

$3+5=$  \_\_\_\_\_

$5+5=$  \_\_\_\_\_

$2+3=$  \_\_\_\_\_

$5+8=$  \_\_\_\_\_

$2+1=$  \_\_\_\_\_

$8+8=$  \_\_\_\_\_

$7+6=$  \_\_\_\_\_

$9+9=$  \_\_\_\_\_







Name: \_\_\_\_\_



Date: \_\_\_\_\_

# Addition

Count and fill in the correct answer.

 $+$  $=$

 $+$  $=$

 $+$  $=$

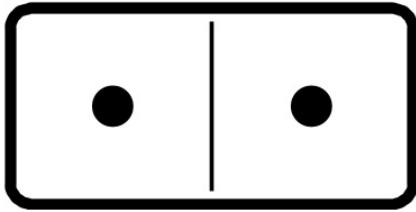


Name: \_\_\_\_\_


Date: \_\_\_\_\_

# Domino Addition

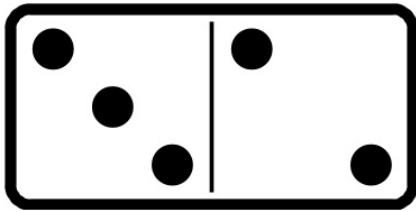
Write the number sentence and add the dots.




$$\square + \square = \square$$



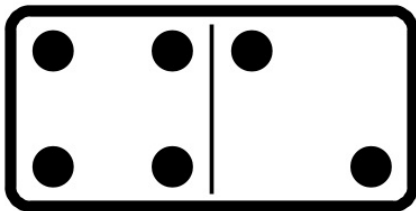
$$\square + \square = \square$$



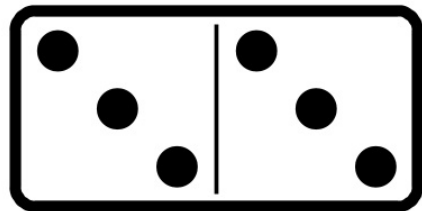
$$\square + \square = \square$$



$$\square + \square = \square$$



$$\square + \square = \square$$



$$\square + \square = \square$$



Name: \_\_\_\_\_

Date: \_\_\_\_\_

# Addition


Count and fill in the correct answer.




+




=




+



=



+



=



Name: \_\_\_\_\_

Date: \_\_\_\_\_

# Addition

solve and write the sum.

$2+4=$  \_\_\_\_\_

$1+3=$  \_\_\_\_\_

$1+7=$  \_\_\_\_\_

$5+6=$  \_\_\_\_\_

$2+6=$  \_\_\_\_\_

$8+8=$  \_\_\_\_\_

$2+8=$  \_\_\_\_\_

$9+3=$  \_\_\_\_\_

$3+5=$  \_\_\_\_\_

$2+1=$  \_\_\_\_\_

$6+6=$  \_\_\_\_\_

$9+7=$  \_\_\_\_\_

$7+7=$  \_\_\_\_\_

$9+9=$  \_\_\_\_\_

$2+3=$  \_\_\_\_\_

$5+5=$  \_\_\_\_\_

$5+8=$  \_\_\_\_\_

$7+6=$  \_\_\_\_\_

$8+3=$  \_\_\_\_\_

$7+3=$  \_\_\_\_\_

$2+1=$  \_\_\_\_\_



Name: \_\_\_\_\_

Date: \_\_\_\_\_

# Subtraction

solve and write the difference.

$$5 - 1 = \underline{\hspace{2cm}}$$

$$5 - 3 = \underline{\hspace{2cm}}$$

$$4 - 2 = \underline{\hspace{2cm}}$$

$$3 - 1 = \underline{\hspace{2cm}}$$

$$2 - 2 = \underline{\hspace{2cm}}$$

$$4 - 3 = \underline{\hspace{2cm}}$$



Name: \_\_\_\_\_

Date: \_\_\_\_\_

# Subtraction

solve and write the difference.




Name: \_\_\_\_\_

Date: \_\_\_\_\_

# Subtraction

solve and write the difference.




$4 - 1 =$



$3 - 1 =$



$5 - 3 =$



$4 - 2 =$



$2 - 1 =$




Name: \_\_\_\_\_


Date: \_\_\_\_\_

# Subtraction


solve and write the difference.



$$\square - \square = \square$$



$$\square - \square = \square$$



$$\square - \square = \square$$




Name: \_\_\_\_\_


Date: \_\_\_\_\_

# Subtraction

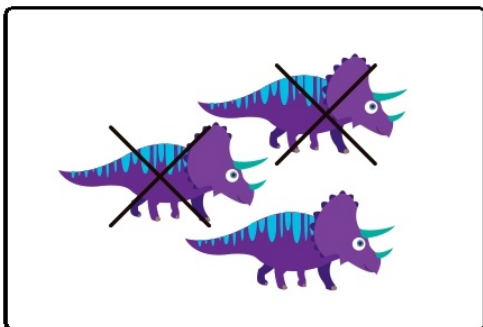
solve and write the difference.



$$\square - \square = \square$$



$$\square - \square = \square$$



$$\square - \square = \square$$



Name: \_\_\_\_\_

Date: \_\_\_\_\_

# Find the missing number

solve and write the difference.

$4 - 1 = \square$

$10 - 0 = \square$

$1 - 0 = \square$

$5 - 4 = \square$

$5 - 3 = \square$

$2 - 0 = \square$

$7 - 4 = \square$



$8 - 4 = \square$

$7 - 6 = \square$

$5 - 1 = \square$



Name: \_\_\_\_\_

Date: \_\_\_\_\_

# Which is Larger?

Circle the larger number.

25 24

82 64

28 37

25 24

99 90

46 49

73 86

55 65



Name: \_\_\_\_\_

Date: \_\_\_\_\_

# Which is Larger?

Circle the larger number.

35 54

22 26

38 57

29 41

89 90

40 50

75 66

72 85



